
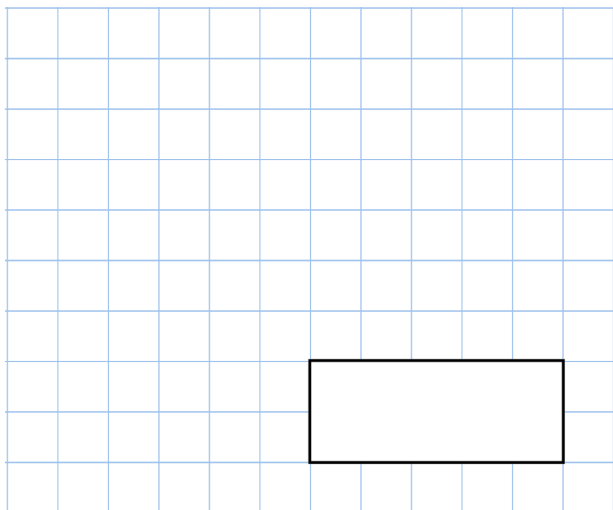


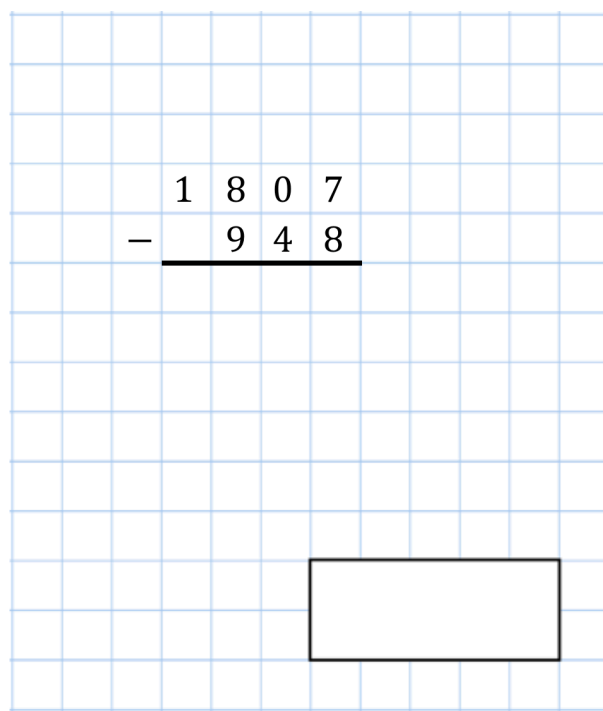


23rd February

$$5 - 9$$



$$\begin{array}{r} 1807 \\ - 948 \\ \hline \end{array}$$



Gary buys four packets of crisps and pays with a £5 note



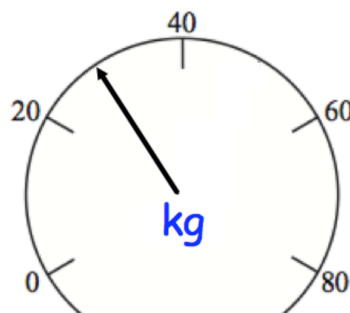
Here is his change



Work out the price of 1 packet of crisps

Hannah is 40kg **heavier** than Naomi.
The scales show Naomi's weight.

How heavy is Hannah?



Louisa is reading a book.

She has reached **chapter** XXIV

Write XXIV in **figures**